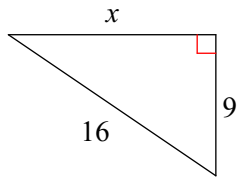


Find missing side in simplified radical form

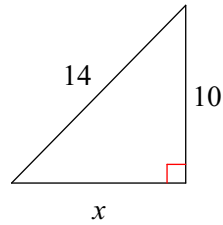
Date _____ Period _____

Find the missing side of each triangle. Leave your answers in simplest radical form.

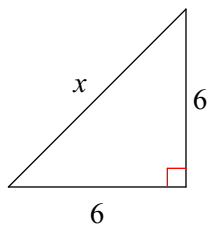
1)



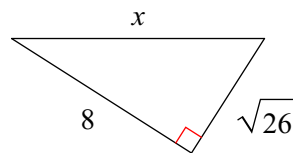
2)



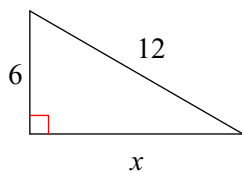
3)



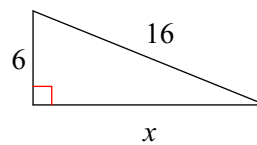
4)



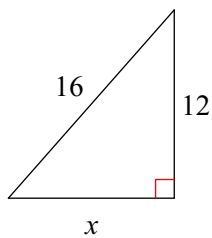
5)



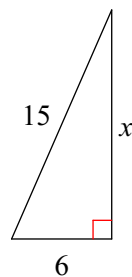
6)



7)



8)



Answers to Find missing side in simplified radical form (ID: 1)

1) $5\sqrt{7}$
5) $6\sqrt{3}$

2) $4\sqrt{6}$
6) $2\sqrt{55}$

3) $6\sqrt{2}$
7) $4\sqrt{7}$

4) $3\sqrt{10}$
8) $3\sqrt{21}$