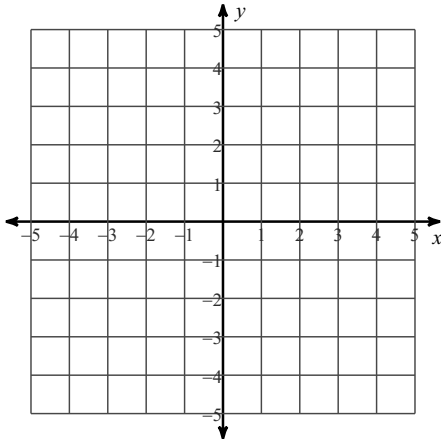


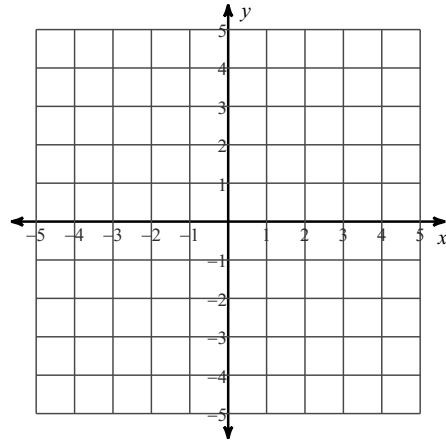
Test Review Graphing Systems

Solve each system by graphing.

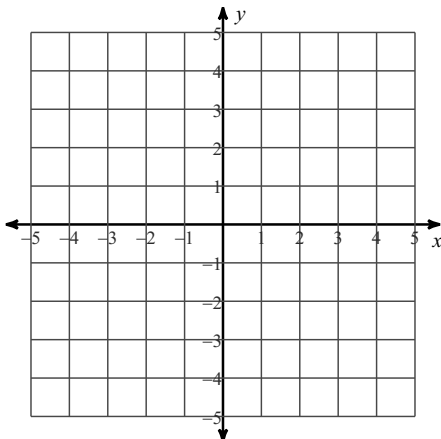
1) $3x - 4y = -16$
 $5x + 4y = -16$



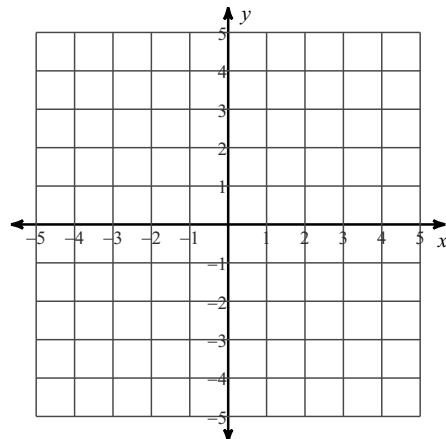
2) $x - 2y = 8$
 $7x + 2y = 8$



3) $x - y = 1$
 $x - y = 3$



4) $2x + y = 4$
 $4x - y = 2$



Answers to Test Review Graphing Systems

1) $(-4, 1)$

2) $(2, -3)$

3) No solution

4) $(1, 2)$